

**CBSE Board**  
**Class XII Chemistry – Set 1**  
**Board Paper - 2013**

**Time: 3 hours**

**Total Marks: 70**

---

**General instructions:**

1. All questions are compulsory.
  2. Marks for each question are indicated against it.
  3. Question numbers 1 to 8 are very short- answer questions carrying 1 mark each. Answer these in one word or about one sentence each.
  4. Question numbers 9 to 18 are short-answer questions, carrying 2 marks each. Answer these in about 30 words each.
  5. Question numbers 19 to 27 are short answer questions, carrying 3 marks each. Answer these in about 40 words each.
  6. Question numbers 28 to 30 are long answer questions of carrying 5 marks each. Answer these in about 70 words each.
  7. Use Log Tables, if necessary. Use of calculators is not permitted.
- 

**Q. 1** How many atoms constitute one unit cell of a face-centered cubic crystal? [1]

**Q. 2** Name the method used for the refining of Nickel metal. [1]

**Q. 3** What is the covalency of nitrogen in  $N_2O_5$ ? [1]

**Q. 4** Write the IUPAC name of  $CH_3 - \underset{\underset{Cl}{|}}{CH} - CH_2 - CH = CH_2$  [1]

**Q. 5** What happens when  $CH_3Br$  is treated with  $KCN$ ? [1]

**Q. 6** Write the structure of 3-methyl butanal. [1]

**Q. 7** Arrange the following in increasing order of their basic strength in aqueous solution:  
 $CH_3NH_2, (CH_3)_3N, (CH_3)_2NH$  [1]

**Q. 8** What are three types of RNA molecules which perform different functions? [1]

**Q. 9** 18 g of glucose,  $C_6H_{12}O_6$  (Molar mass =  $180 \text{ g mol}^{-1}$ ) is dissolved in 1 kg of water in a sauce pan. At what temperature will this solution boil?

( $K_b$  for water =  $0.52 \text{ k kg mol}^{-1}$ , boiling points of pure water =  $373.15 \text{ K}$ ) [2]

**Q. 10** The conductivity of 0.20 M solution of  $KCl$  at 298 K is  $0.025 \text{ S cm}^{-1}$ . Calculate its molar conductivity. [2]

**Q. 11** Write the dispersed phase and dispersion medium of the following colloidal systems:

- (i) Smoke
- (ii) Milk

**OR**

What are lyophilic and lyophobic colloids? Which of these sols can be easily coagulated on the addition of small amounts of electrolytes?

**Q. 12** Write the differences between physisorption and chemisorption with respect to the following:

- (i) Specificity
- (ii) Temperature dependence
- (iii) Reversibility and
- (iv) Enthalpy change [2]

**Q. 13**

- (a) Which solution is used for the leaching of silver metal in the presence of air in the metallurgy of silver?
- (b) Out of C and CO, which is a better reducing agent at the lower temperature range in the blast furnace to extract iron from the oxide ore? [2]

**Q. 14** What happens when

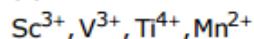
- (i)  $\text{PCl}_5$  is heated?
- (ii)  $\text{H}_3\text{PO}_3$  is heated?

Write the reaction involved. [2]

**Q. 15**

(a) Which metal in the first transition series (3d series) exhibits + 1 oxidation state most frequently and why?

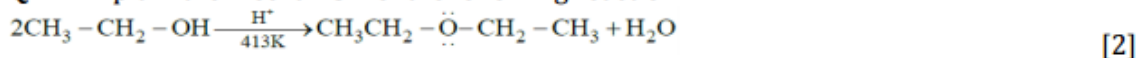
(b) Which of the following cations are coloured in aqueous solutions and why?



(At. Nos. Sc = 21, V = 23, Ti = 22, Mn = 25) [2]

**Q. 16** Chlorobenzene is extremely less reactive towards a nucleophilic substitution reaction. Give two reasons for the same. [2]

**Q. 17** Explain the mechanism of the following reaction.



**Q. 18** How will you convert:

- (i) Propene to Propan - 2-ol?  
(ii) Phenol to 2, 4, 6- trinitrophenol? [2]

**Q. 19** After watching a programme on TV about the adverse effects of junk food and soft drinks on the health of school children, Sonali, a student of Class XII, discussed the issue with the school principal. Principal immediately instructed the canteen contractor to replace the fast food with the fibre and vitamins rich food like sprouts, salad, fruits etc. This decision was welcomed by the parents and the students. After reading the above passage, answer the following questions:

- (a) What values are expressed by Sonali and the Principal of the school?  
(b) Give two examples of water-soluble vitamins. [3]

**Q.20** How would you account for the following?

- (i) Transition metals exhibit variable oxidation states.  
(ii) Zr (Z = 40) and Hf (Z = 72) have almost identical radii.  
(iii) Transition metals and their compounds act as catalyst.

**OR**

Complete the following chemical equations:

- (i)  $\text{Cr}_2\text{O}_7^{2-} + 6\text{Fe}^{2+} + 14\text{H}^+ \rightarrow$   
(ii)  $2\text{CrO}_4^{2-} + 2\text{H}^+ \rightarrow$   
(iii)  $2\text{MnO}_4^- + 5\text{C}_2\text{O}_4^{2-} + 16\text{H}^+ \rightarrow$  [3]

**Q. 21**

- (i) Which one of the following is a food preservative?  
Equanil, Morphine, Sodium benzoate  
(ii) Why is bithional added to soap?  
(iii) Which class of drugs is used in sleeping pills? [3]

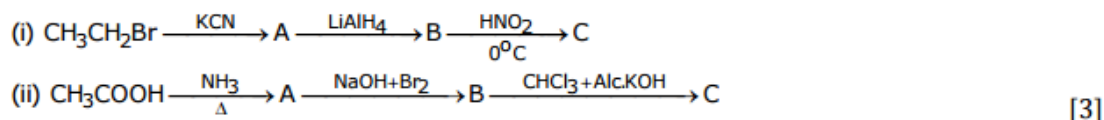
**Q. 22**

- (a) What type of semiconductor is obtained when silicon is doped with boron?  
(b) What type of magnetism is shown in the following alignment of magnetic moments?



- (c) What type of point defect is produced when AgCl is doped with  $\text{CdCl}_2$ ? [3]

**Q. 23** Give the structures of products A, B and C in the following reactions:



**Q. 24** Write the IUPAC names of the following coordination compounds:

- (i)  $[\text{Cr}(\text{NH}_3)_3\text{Cl}_3]$   
(ii)  $\text{K}_3[\text{Fe}(\text{CN})_6]$   
(iii)  $[\text{CoBr}_2(\text{en})_2]^+$ , (en = ethylenediamine) [3]

**Q. 25** Determine the osmotic pressure of a solution prepared by dissolving  $2.5 \times 10^{-2}$  g of  $\text{K}_2\text{SO}_4$  in 2L of water at  $25^\circ\text{C}$ , assuming that it is completely dissociated.

( $R = 0.0821 \text{ L atm K}^{-1} \text{ mol}^{-1}$ , Molar mass of  $\text{K}_2\text{SO}_4 = 174 \text{ g mol}^{-1}$ ) [3]

**Q. 26** Calculate the emf of the following cell at 298 K:

$\text{Fe(s)} | \text{Fe}^{2+} (0.001\text{M}) || \text{H}^+ (1\text{M}) | \text{H}_2(\text{g}) (1\text{bar}), \text{Pt(s)}$   
(Given  $E^\circ_{\text{cell}} = +0.44 \text{ V}$ ) [3]

**Q. 27** Write the names and structures of the monomers of the following polymers:

- (i) Bakelite  
(ii) Nylon-6  
(iii) Polythene [3]

**Q. 28**

(a) Give reasons for the following:

- (i) Bond enthalpy of  $\text{F}_2$  is lower than that of  $\text{Cl}_2$ .  
(ii)  $\text{PH}_3$  has lower boiling point than  $\text{NH}_3$ .

(b) Draw the structures of the following molecules:

- (i)  $\text{BrF}_3$   
(ii)  $(\text{HPO}_3)_3$   
(iii)  $\text{XeF}_4$

**OR**

(a) Account for the following:

- (i) Helium is used in diving apparatus.  
(ii) Fluorine does not exhibit positive oxidation state.  
(iii) Oxygen shows catenation behavior less than sulphur.

(b) Draw the structures of the following molecules:

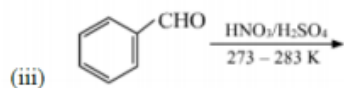
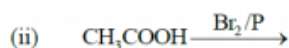
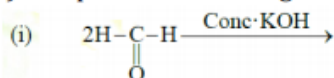
- (i)  $\text{XeF}_2$   
(ii)  $\text{H}_2\text{S}_2\text{O}_8$  [5]

**Q. 29**

- (a) Although phenoxide ion has more number of resonating structures than Carboxylate ion, Carboxylic acid is a stronger acid than phenol. Give two reasons.
- (b) How will you bring about the following conversions?
- (i) Propanone to propane
- (ii) Benzoyl chloride to benzaldehyde
- (iii) Ethanal to but-2-enal

**OR**

- (a) Complete the following reactions:



- (b) Give simple chemical tests to distinguish between the following pairs of compounds:
- (i) Ethanal and Propanal
- (ii) Benzoic acid and Phenol

**Q. 30**

- (a) A reaction is second order in A and first order in B.
- (i) Write the differential rate equation.
- (ii) How is the rate affected on increasing the concentration of A three times?
- (iii) How is the rate affected when the concentrations of both A and B are doubled?
- (b) A first order reaction takes 40 minutes for 30% decomposition. Calculate  $t_{1/2}$  for this reaction. (Given  $\log 1.428 = 0.1548$ )

**OR**

- (a) For a first order reaction, show that time required for 99% completion is twice the time required for the completion of 90% of reaction.
- (b) Rate constant 'k' of a reaction varies with temperature 'T' according to the equation:

$$\log K = \log A - \frac{E_a}{2.303R} \left( \frac{1}{T} \right)$$

Where  $E_a$  is the activation energy. When a graph is plotted for  $\log k$  Vs  $\frac{1}{T}$  a straight line with a slope of  $-4250 \text{ K}$  is obtained. Calculate ' $E_a$ ' for the reaction. ( $R = 8.314 \text{ JK}^{-1} \text{ mol}^{-1}$ )